






## Maths

Use an empty number line to work out these word problems– think carefully about which operations you need to use, addition or subtraction.

**Challenge–** Show which coins or notes you would receive as change.

 <p>I buy some hamster food for £7.38. I pay using £10. How much change will I get?</p>	<p>I buy 3 cakes from the baker, costing 75p each. I pay with £5. How much change will the baker give me?</p> 	<p>Ben and Sam buy some pencils costing £3.89. They pay with £6.00. How much money will they get in change?</p> 
<p>Mum gives me £2.50 pocket money. I spend £1.70 on a new book. How much money will I have left to buy some sweets with?</p> 	<p>There are 163 punnets of strawberries which cost £2.47 each. I buy 2 punnets and pay with £5. How much change will I get?</p> 	<p>If I buy an ice cream for me costing 79p and one for my friend costing 99p, how much change will I get back from £4?</p> 