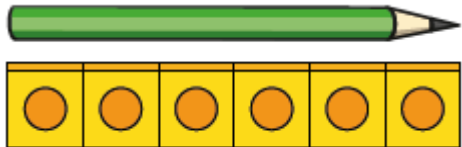


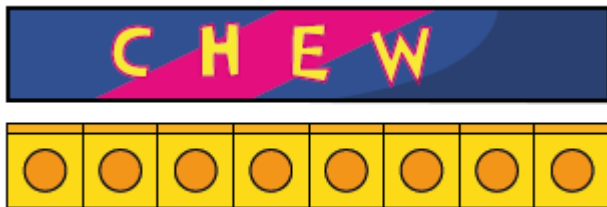
26th January 2021

We are learning to use non standard units to measure and compare the length or height of different objects.

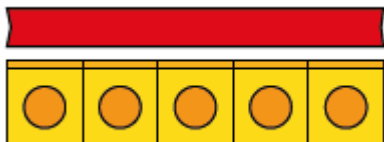
How long is each object?



The pencil is cubes long.

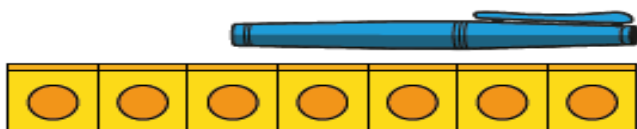
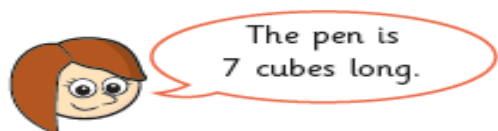


The chew bar is cubes long.



The ribbon is cubes long.

Do you agree with Rosie? Explain your answer.



Measure objects around your home using your unit of measure.

You could use:

Pens, forks, or even your hands or feet.

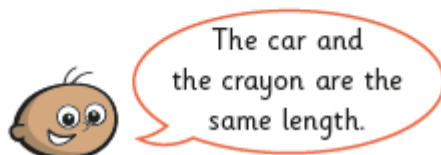
Write in your books the objects, how many hands or pencils long they are.

Which one is longest or tallest?

Which one is shortest?

Challenges


Tommy has been measuring some objects.



Do you agree with Tommy?

What mistake has he made?

Measure the length of your foot. Then measure the distance between your wrist and your elbow. Compare the two distances.



What do you notice?