

25th January 2021

We are learning to compare the length and height of objects.

1) Which is the taller flower? Purple or Red?




2) Which is the shorter tree? 1 or 2?



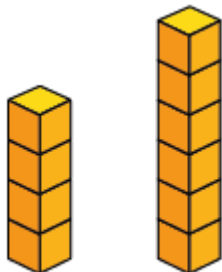
1

2

3) Which colour ribbon is the longest?



4) Which is the taller tower? A or B?



A

B

5) Complete the sentences:




C is longer than


..... is the longest train.

..... is the shortest train.

6) Complete the sentences.



Annie



Rosie



Mo


..... is the tallest.

Mo is taller than

..... is the shortest.

Challenge.

- 1) Eva thinks the pencils are the same length.



How can Eva check if she is correct?

- 2) Can you think of an object in your house that is longer than a pencil? Can you think of something that is shorter than a pencil?