


Five times table Challenge Question answer

$19 \times 5 = 95$ 

What is 20×5 ?



How do you know?

Explain your answer using...

- Drawings
- Methods to prove it
- Number sentences

You could show this using any of the following...


I know that 20×5 is 100 because we are adding groups of 5 each time and if I know that $19 \times 5 = 95$ then...

$$19 \times 5 = 95$$




$$20 \times 5 = 100$$

you add one more group of 5.



$$19 \times 5 = 95$$

 + 1 more group of 5

$$20 \times 5 = 100$$