

## Numbers to 10.

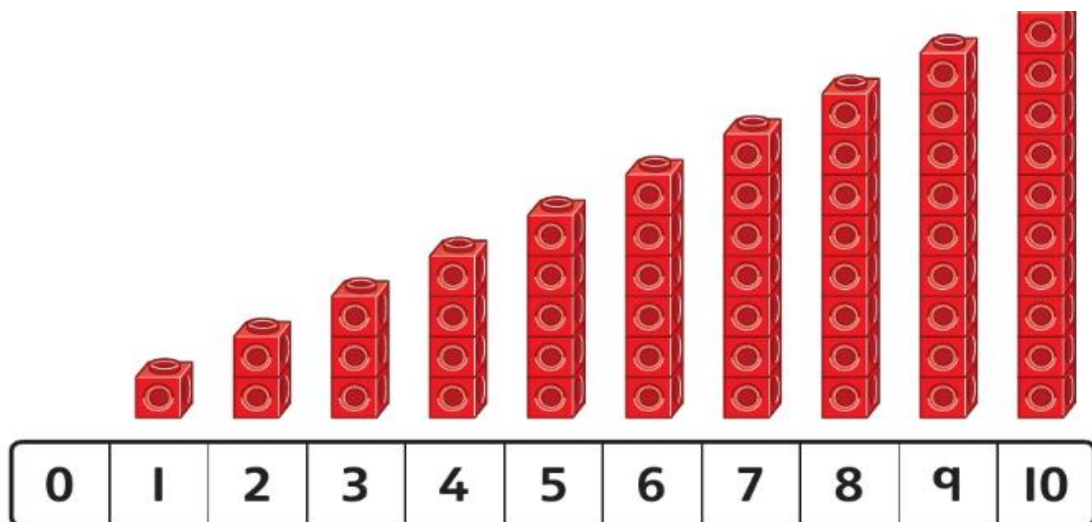
Practice counting to 10 and back again.

Count objects around the home and sort them into groups.

E.g How many forks are there? How many spoons are there? Are there more forks or spoons?

How do you know?

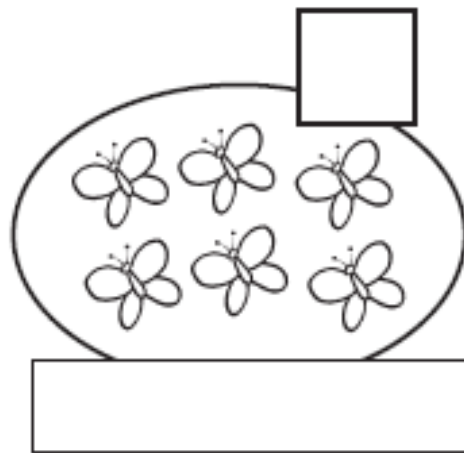
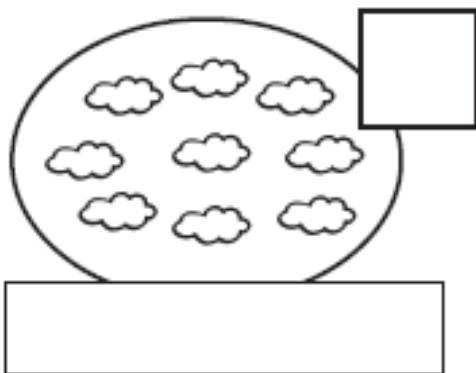
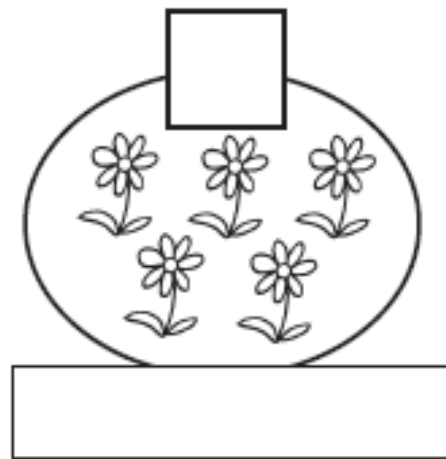
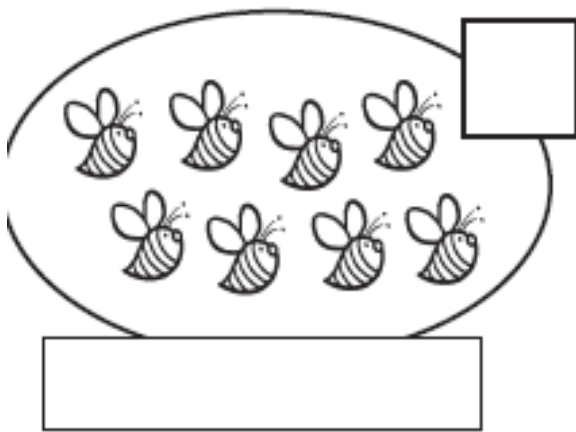
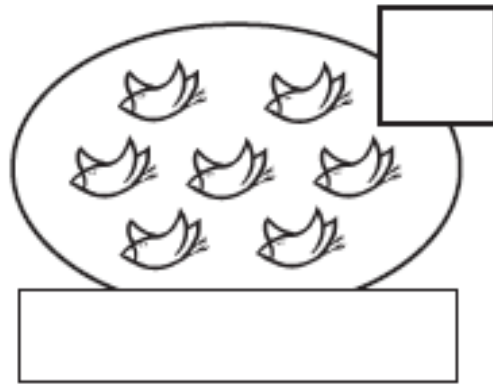

1	2	3	4	5	6	7	8	9	10
one	two	three	four	five	six	seven	eight	nine	ten



Count with John Hartman

<https://www.youtube.com/watch?v=uGL7xYEVeay>

How many objects are there in each set?



More than (*greater*) and less than (*fewer*).

**More**  
Colour the set that has more.



cups



bowls

There are more \_\_\_\_\_ than \_\_\_\_\_ .



flowers

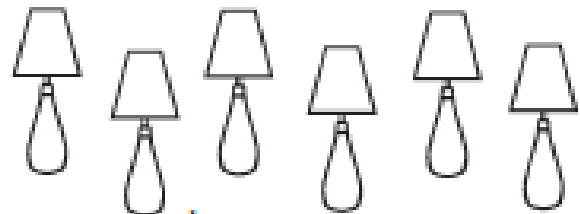


apples

There are more \_\_\_\_\_ than \_\_\_\_\_ .

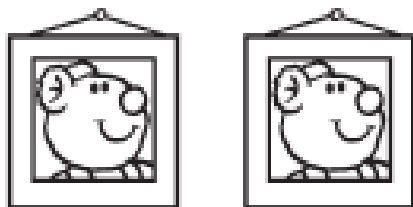


bottles



lamps

There are more \_\_\_\_\_ than \_\_\_\_\_ .



pictures



umbrellas

There are more \_\_\_\_\_ than \_\_\_\_\_ .

Which set has fewer objects.

